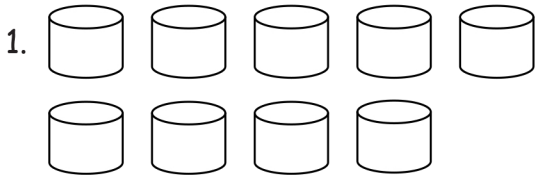


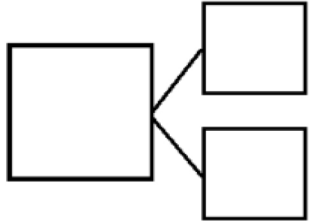
Name \_\_\_\_\_

Date \_\_\_\_\_

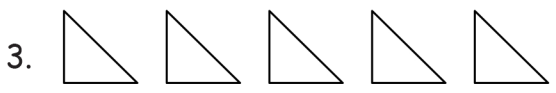
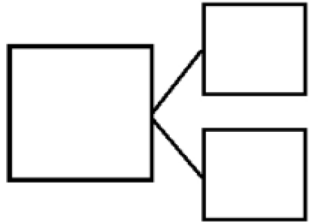
How many objects do you see? Draw one more. How many objects are there now?




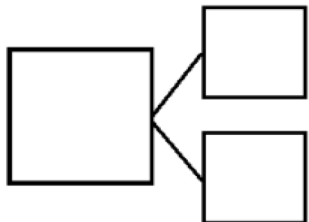
1 more than 9 is \_\_\_\_.  
 $9 + 1 = \underline{\quad}$



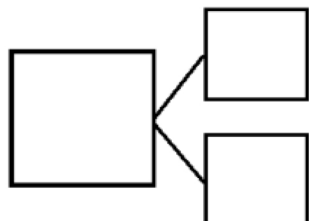
\_\_\_\_ is 1 more than 7.  
\_\_\_\_ =  $7 + 1$



\_\_\_\_ is 1 more than 5.  
\_\_\_\_ =  $5 + 1$



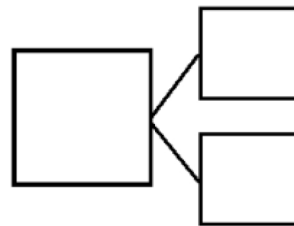
1 more than 8 is \_\_\_\_.  
\_\_\_\_ + 1 = \_\_\_\_




5. Imagine adding 1 more pencil to the picture.  
Then, write the numbers to match how many pencils there will be.



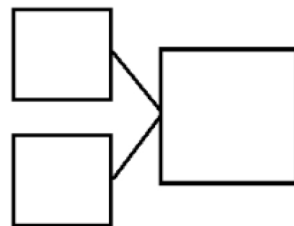
1 more than 5 is _____.
$5 + 1 = \underline{\hspace{2cm}}$



6. Imagine adding 1 more flower to the picture.  
Then, write the numbers to match how many flowers there will be.



_____ is 1 more than 8.
_____ + 1 = _____



## Answer Key

1. 1 more drawn; 10; 10;  
10, 9, 1
2. 1 more drawn; 8; 8;  
8, 7, 1
3. 1 more drawn; 6; 6;  
6, 5, 1
4. 1 more drawn; 9; 8, 9;  
9, 8, 1
5. 6; 6; 6, 5, 1
6. 9; 8, 9; 8, 1, 9