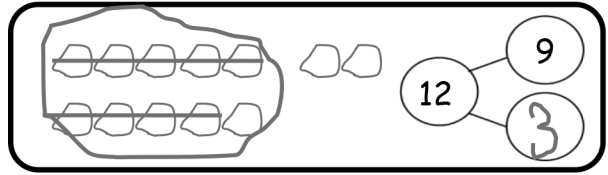


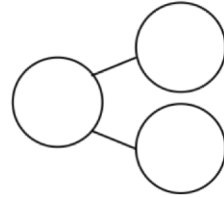
Name _____

Date _____

Circle 10 and subtract. Make a number bond.



1. $15 - 9 = \underline{\quad}$



Draw and circle 10. Subtract and make a number bond.

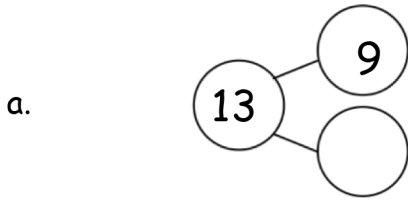
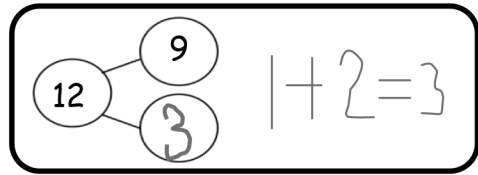
2. $14 - 9 = \underline{\quad}$

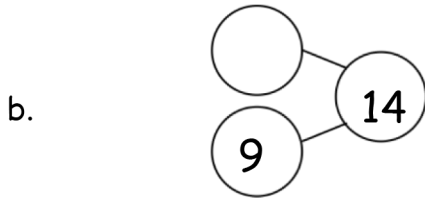
3. $12 - 9 = \underline{\quad}$

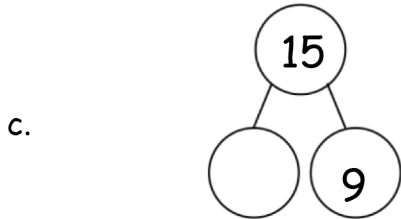
4. $13 - 9 = \underline{\quad}$

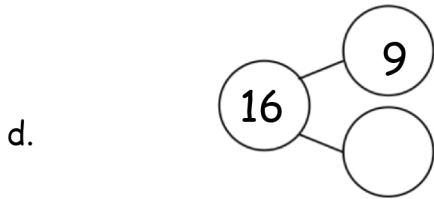
5. $16 - 9 = \underline{\quad}$

6. Complete the number bond and write the number sentence that helped you.









7. Make the number bond that would come next and write a number sentence that matches.

Answer Key

1. Group of 10 circled; number bond showing 15, 9, 6; 6
2. Group of 10 drawn and circled; number bond showing 14, 9, 5; 5
3. Group of 10 drawn and circled; number bond showing 12, 9, 3; 3
4. Group of 10 drawn and circled; number bond showing 13, 9, 4; 4
5. Group of 10 drawn and circled; number bond showing 16, 9, 7; 7
6.
 - a. 4; $1 + 3 = 4$
 - b. 5; $1 + 4 = 5$
 - c. 6; $1 + 5 = 6$
 - d. 7; $1 + 6 = 7$
7. Number bond drawn showing 17, 9, 8; $9 + 8 = 17$