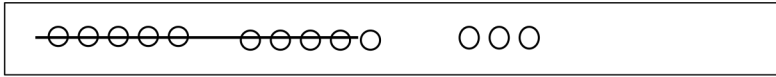


Name _____

Date _____

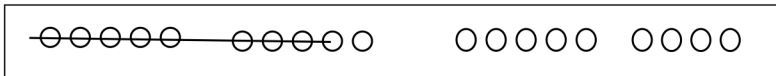
Write the number sentence for each 5-group row drawing.

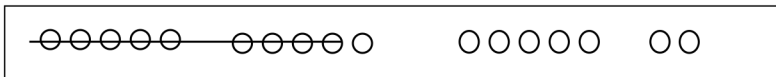
1.



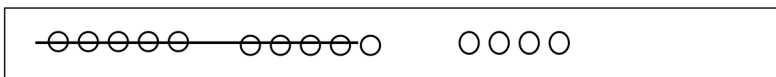
13 - 9 = 4





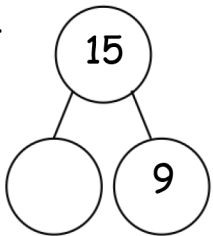




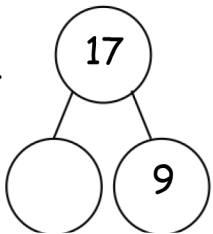


Draw 5-groups to complete the number bond and write the 9- number sentence.

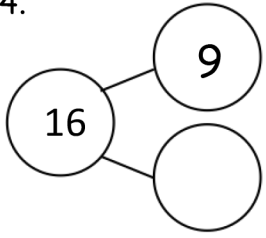
2.



3.

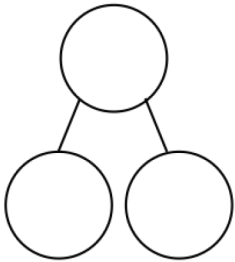


4.

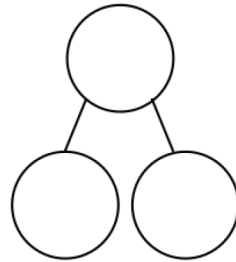


Draw 5-groups to show making ten and taking from ten to solve the two number sentences. Make a number bond and write two additional number sentences that would have this number bond.

5. $8 + 9 = \underline{\quad}$



6. $17 - 9 = \underline{\quad}$



Answer Key

1. Answer provided.

$$16 - 9 = 7$$

$$19 - 9 = 10$$

$$17 - 9 = 8$$

$$18 - 9 = 9$$

$$14 - 9 = 5$$

2. 5-groups drawn; 6; $15 - 9 = 6$

3. 5-groups drawn; 8; $17 - 9 = 8$

4. 5-groups drawn; 7; $16 - 9 = 7$

5. 5-groups drawn; 17; 17, 9, 8; $9 + 8 = 17$; $17 - 9 = 8$

6. 5-groups drawn; 8; 17, 9, 8; $17 - 8 = 17$; $8 + 9 = 17$