

Name _____

Date _____

Use number bonds to show your thinking. Write the 10+ fact.

1. $8 + 3 = \underline{\quad}$

$10 + \underline{\quad} = \underline{\quad}$

2. $6 + 8 = \underline{\quad}$

$\underline{\quad} + 10 = \underline{\quad}$

3. $\underline{\quad} = 8 + 8$

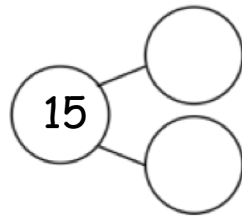
$\underline{\quad} = 10 + \underline{\quad}$

4. $\underline{\quad} = 5 + 8$

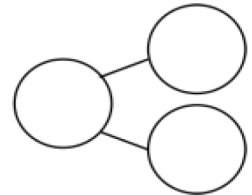
$\underline{\quad} = 10 + \underline{\quad}$

Complete the addition sentences.

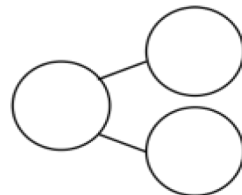
5. a. $7 + 8 = \underline{\quad}$



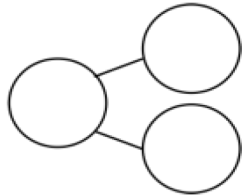
b. $10 + 5 = \underline{\quad}$



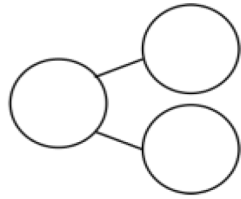
6. a. $16 = \underline{\quad} + 8$



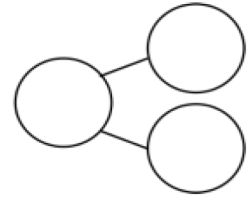
b. $10 + 6 = \underline{\quad}$



7. a. $\underline{\quad} = 9 + 8$



b. $10 + 7 = \underline{\quad}$



Draw a line to the matching number sentence. You may use a number bond or 5-group drawing to help you.

8. $11 = 8 + 3$

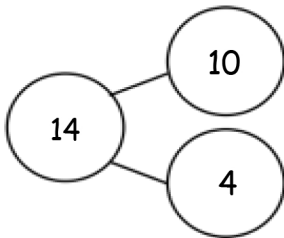
$8 + 6 = 14$

9. Lisa had 5 red rocks and 8 white rocks.
How many rocks did she have?

$10 + 1 = 11$

$13 = 10 + 3$

10.



Answer Key

1. 2, 1; 11; 1, 11
2. 4, 2; 14; 4, 14
3. 2, 6; 16; 16, 6
4. 13; 3, 2; 13, 3
5. a. 15; 7, 8
b. 15; 15; 5, 10
6. a. 8; 16; 8, 8
b. 16; 16; 6, 10
7. a. 17; 17; 8, 9
b. 17; 17; 7, 10
8. $10 + 1 = 11$
9. $13 = 10 + 3$
10. $8 + 6 = 14$